



Module 16

SEANCE 4

Lundi 6 avril 2020

Bonjour les CP B !

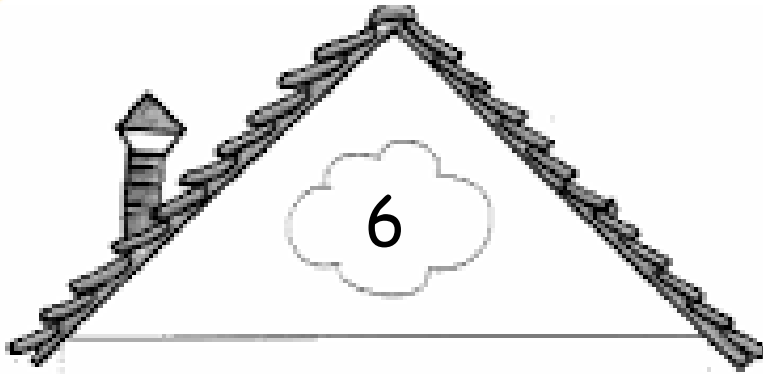
J'espère que vous êtes en forme, suivez bien le diaporama.

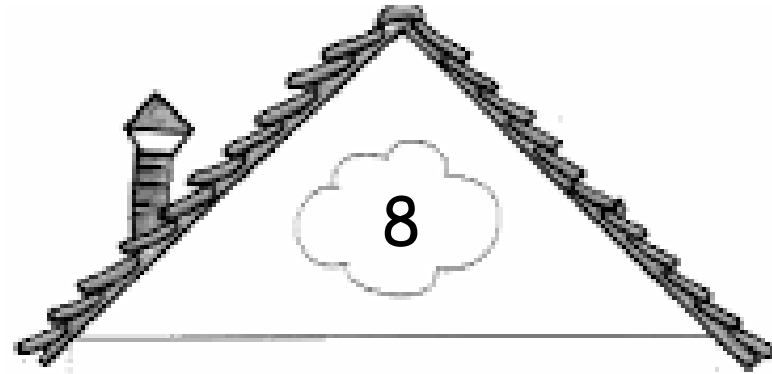
Ne vous inquiétez pas, nous reverrons ça en classe !

Activités ritualisées



Trouve deux décompositions du nombre.





Trouve les décompositions du nombre.

6

$0 + 6$
$1 + 5$
$2 + 4$
$3 + 3$
$4 + 2$
$5 + 1$
$6 + 0$

Trouve les décompositions du nombre.

8
$0 + 8$
$1 + 7$
$2 + 6$
$3 + 5$
$4 + 4$
$5 + 3$
$6 + 2$
$7 + 1$
$8 + 0$



Comparer deux nombres

Lequel est le plus grand? Le plus petit ?

35

53

41

38

23

12

43


71

37

79

< >

Calcul mental



CHRONOMATH 6

**1**

$2 + 2 = \dots$

11

$30 + 7 = \dots$

2

$7 + 1 = \dots$

12

$40 + 1 = \dots$

3

$10 + 1 = \dots$

13

$8 - 1 = \dots$

4

$4 + 2 = \dots$

14

$17 - 1 = \dots$

5

$6 + 2 = \dots$

15

$28 - 1 = \dots$

6

$10 + 9 = \dots$

16

$15 - 1 = \dots$

7

$4 + 4 = \dots$

17

$15 - 2 = \dots$

8

$7 + 3 = \dots$

18

$26 - 1 = \dots$

9

$5 + 5 = \dots$

19

$28 - 3 = \dots$


10

$5 + 6 = \dots$

20

$30 - 5 = \dots$


SCORE :**CP**


$$40 + 2 =$$

$$20 + 1 =$$


$$30 + 9 =$$

+ additions des dizaines +




$$20+30$$

$$30 + 30 =$$




60

$$10 + 30 + 10 =$$




50


$$10 + 10 + 20 =$$



40



APPRENTISSAGE

1 Calcule.



$30 + 20 = 50$

$10 + 10 = \underline{\quad}$

$40 + 20 = \underline{\quad}$

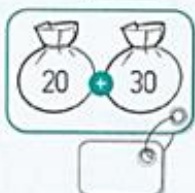
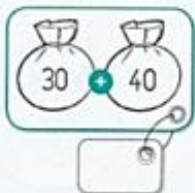
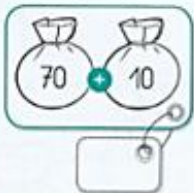
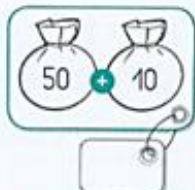
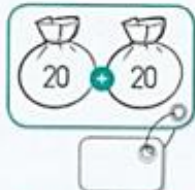
$20 + 10 = \underline{\quad}$

$50 + 20 = \underline{\quad}$

$30 + 10 = \underline{\quad}$

$60 + 10 = \underline{\quad}$

2 Calcule.



3 Calcule.

$10 + 10 = \underline{\quad}$

$40 + 50 = \underline{\quad}$

$50 + 30 = \underline{\quad}$

$10 + 20 = \underline{\quad}$



1 Calcule.



$20 + 4 = 24$



$20 + 3 = \underline{\quad}$



$30 + 4 = \underline{\quad}$

2 Calcule.

$20 + 7 = \underline{\quad}$

$30 + 8 = \underline{\quad}$

$40 + 5 = \underline{\quad}$

$7 + 40 = \underline{\quad}$

$50 + 6 = \underline{\quad}$

$9 + 20 = \underline{\quad}$

3 Relie chaque opération au bon résultat.



35

24

53

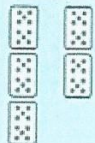
42



1 Calcule.



$30 + 20 = 50$



$10 + 10 = 20$

$40 + 20 = 60$







$20 + 10 = 30$

$50 + 20 = 70$

$30 + 10 = 40$

$60 + 10 = 70$

2 Calcule.



3 Calcule.

$10 + 10 = 20$


$40 + 50 = 90$

$50 + 30 = 80$

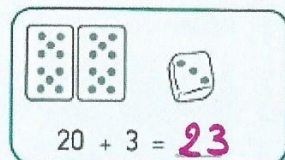
$10 + 20 = 30$




1 Calcule.



$20 + 4 = 24$



$20 + 3 = 23$



$30 + 4 = 34$

2 Calcule.

$20 + 7 = 27$

$30 + 8 = 38$

$40 + 5 = 45$

$7 + 40 = 47$

$50 + 6 = 56$

$9 + 20 = 29$

3 Relie chaque opération au bon résultat.



- 35
- 24
- 53
- 42

